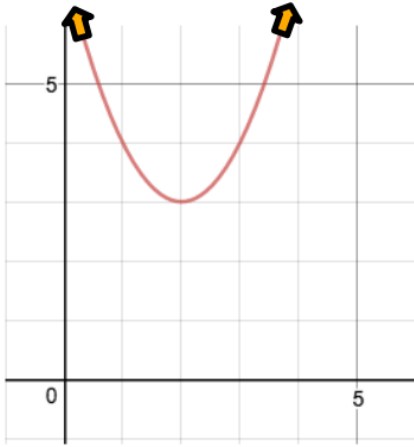


Progress Check: Domain, Range and End Behavior

Name: _____

For each function below identify the domain, range, and end behavior. Make sure to use appropriate notation.

1.

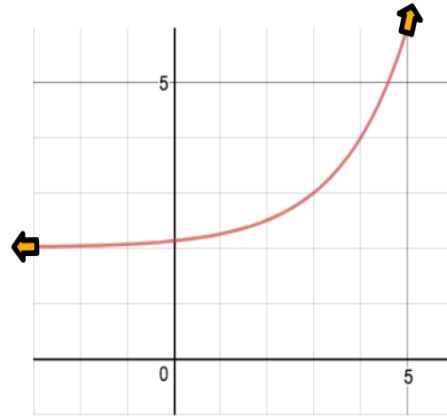


Domain:

Range:

End Behavior:

2.



Domain:

Range:

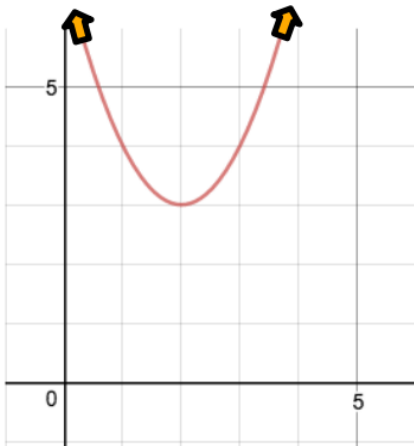
End Behavior:

Progress Check: Domain, Range and End Behavior

Name: _____

For each function below identify the domain, range, and end behavior. Make sure to use appropriate notation.

1.

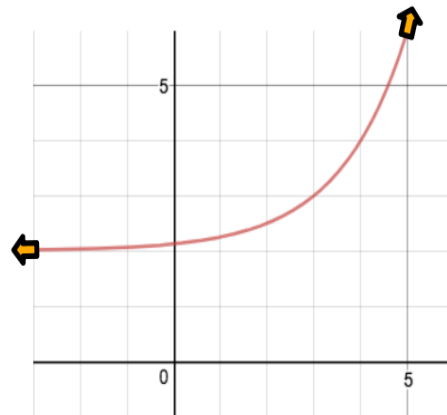


Domain:

Range:

End Behavior:

2.



Domain:

Range:

End Behavior:

