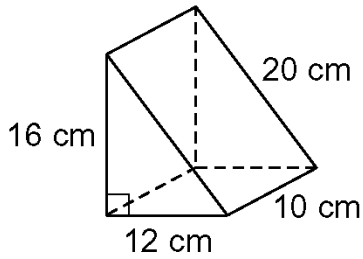


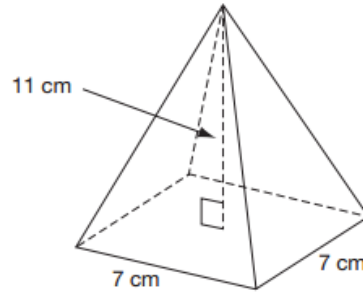
Progress Check – Volumes of Three-Dimensional Solids

Name _____

- 1) Find the volume of the triangular prism.



- 2) Find the volume of the square pyramid.
Round your answer to the nearest hundredth.

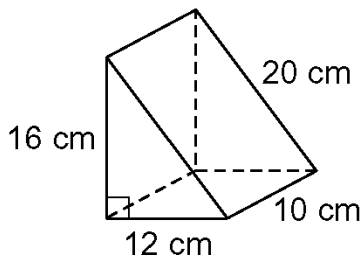


- 3) Find the height of a cylinder with a volume of 500 yd^3 and a radius of 8 yd. Round your answer to the nearest hundredth.

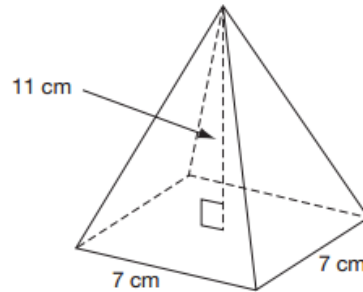
Progress Check – Volumes of Three-Dimensional Solids

Name _____

- 1) Find the volume of the triangular prism.



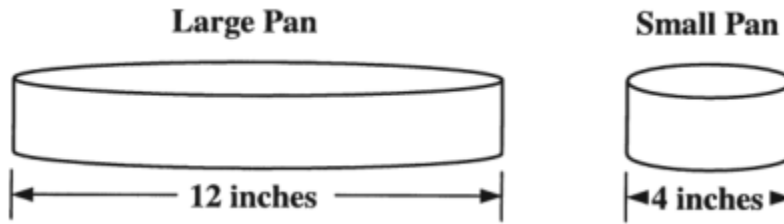
- 2) Find the volume of the square pyramid.
Round your answer to the nearest hundredth.



- 3) Find the height of a cylinder with a volume of 500 yd^3 and a radius of 8 yd. Round your answer to the nearest hundredth.

4) Mrs. Olivares' consumer science class is making two different-size cheesecakes for a fundraiser.

- The large cheesecake pan has a diameter of 12 inches
- The small cheesecake pan has a diameter of 4 inches

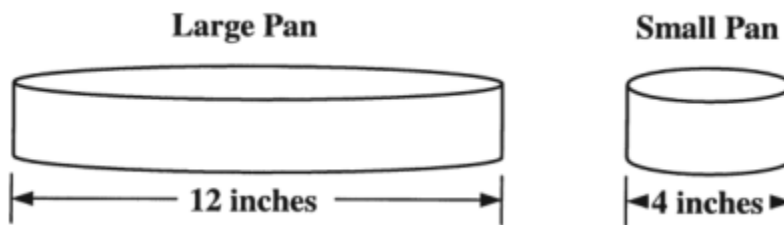


If the pans are both 3 inches deep, how many times greater is the volume of the large pan than that of the small pan?

Show all work!

4) Mrs. Olivares' consumer science class is making two different-size cheesecakes for a fundraiser.

- The large cheesecake pan has a diameter of 12 inches
- The small cheesecake pan has a diameter of 4 inches



If the pans are both 3 inches deep, how many times greater is the volume of the large pan than that of the small pan?

Show all work!