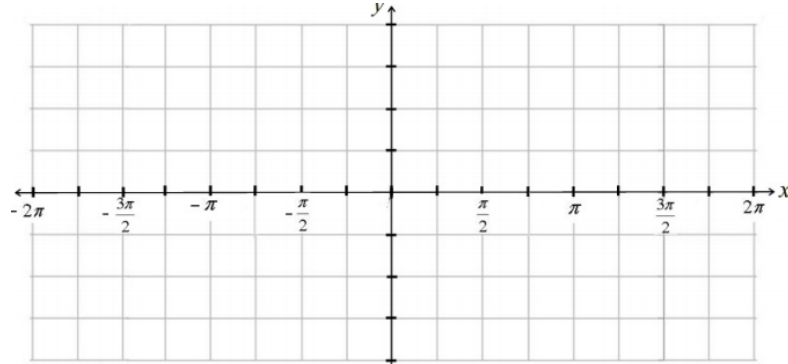


Progress Check: Sine and Cosine Graph (H4-H5)

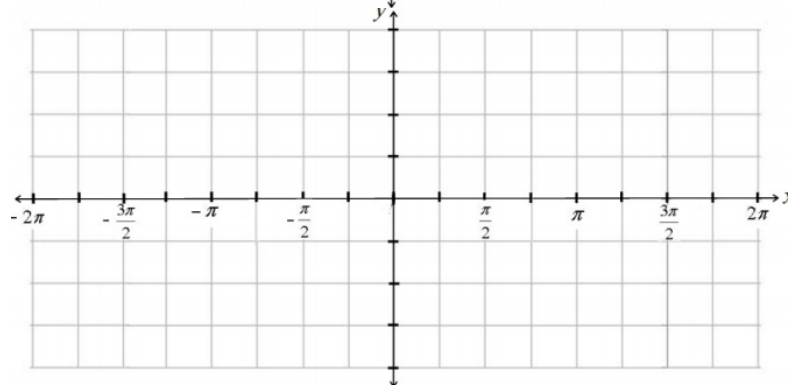
Name: \_\_\_\_\_

Without using your calculator or unit circle make a rough sketch of each of the following graphs. You need to have correct maximums, minimums, and zeros.

$y = \sin(\theta)$



$y = \cos(\theta)$

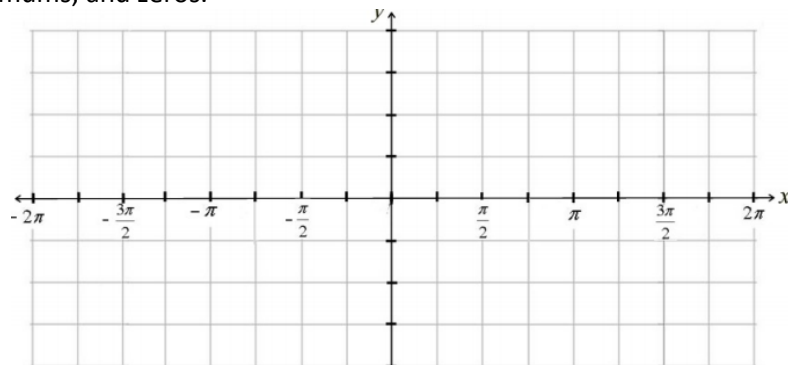


Progress Check: Sine and Cosine Graph (H4-H5)

Name: \_\_\_\_\_

Without using your calculator or unit circle make a rough sketch of each of the following graphs. You need to have correct maximums, minimums, and zeros.

$y = \sin(\theta)$



$y = \cos(\theta)$

